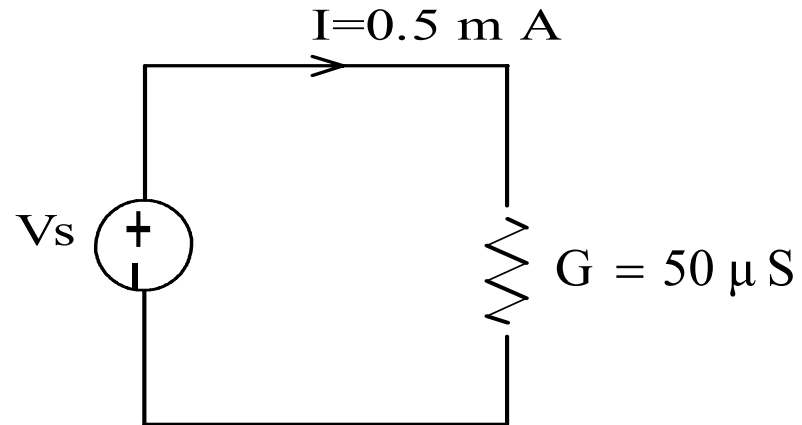


Example :

Find the value of the voltage source and the power absorbed by the resistance



$$G = 50 \mu S \implies R = 1/G = 2 * 10^4$$

$$V_s = IR = (0.5 \text{ mA}) (20 * 10^4 \Omega) = 10 \text{ V}$$

$$P_R = IV = (10 \text{ V}) (0.5 \text{ mA}) = 5 \text{ mW}$$

Example :

Find R and the voltage across
The resistor?

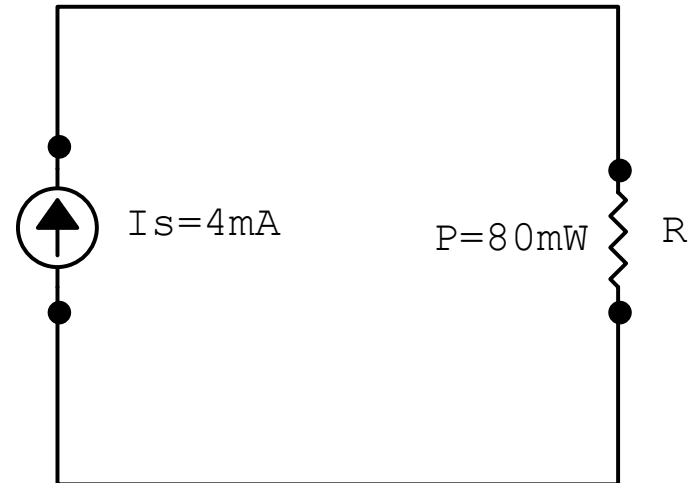
$$P = V I_s$$

$$V = \frac{P}{I_s} = \frac{80 * 10^{-3} \text{ W}}{4 * 10^{-3} \text{ A}}$$

$$V = 20V.$$

$$V = IR = (4 * 10^{-3} \text{ A}) R$$

$$R = \frac{V}{I} = \frac{20 \text{ V.}}{4 * 10^{-3} \text{ A}} = 5k\Omega$$



Kirchoff's Laws:

(1) kirchoff's current law (KCL) :

the sum of all currents entering any node is zero.

$$\Rightarrow \sum_{k=1}^N i_k(t) = 0$$

Where N= number of currents.

Example:

Write the KCL equation

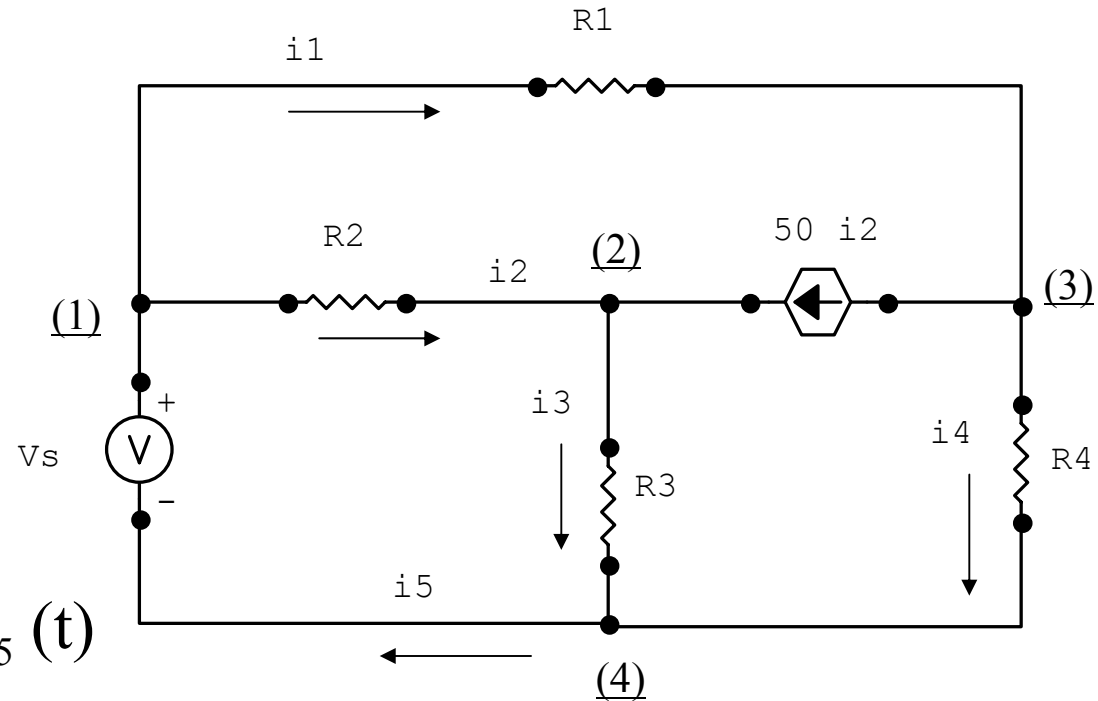
Here we have (4) nodes:

At node (1) : $i_1(t) + i_2(t) = i_5(t)$

At node (2) : $i_2(t) + 50i_2(t) = i_3(t)$

At node (3) : $50i_2(t) + i_4(t) = i_1(t)$

At node (4) : $i_3(t) + i_4(t) = i_5(t)$



(2) Kirchoff's voltage Law (KVL):

The sum of the voltage around any loop is zero.

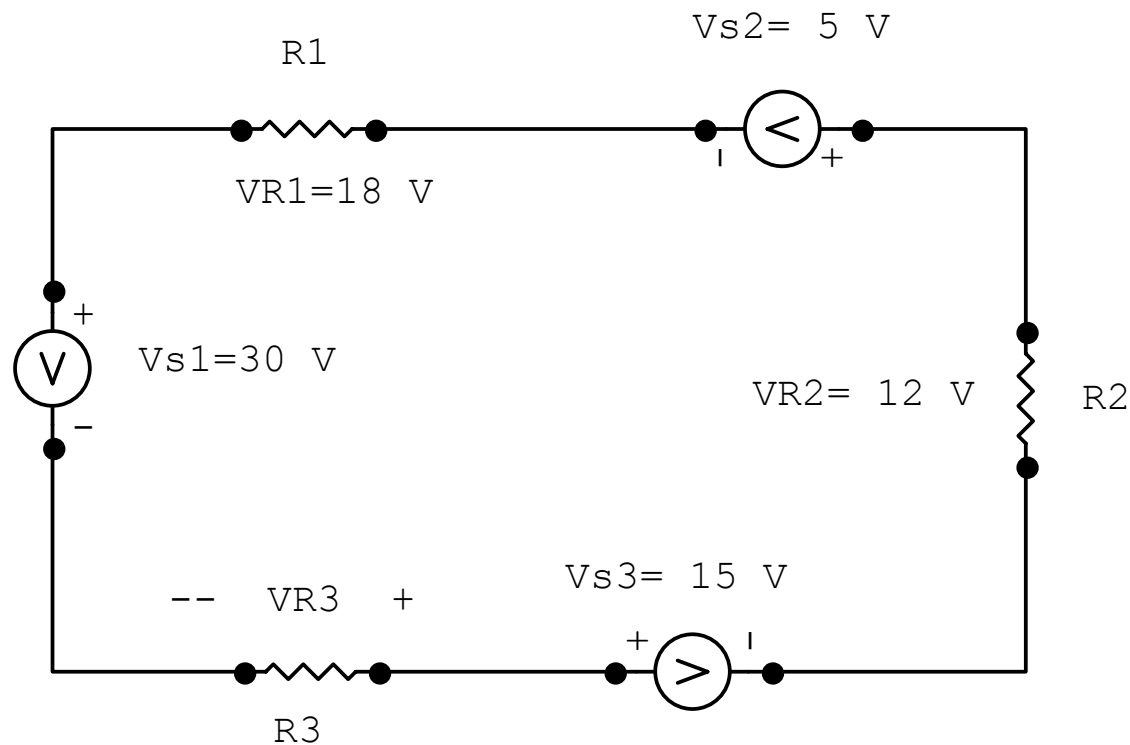
$$\sum_{k=1}^N v_k(t) = 0 \quad \Rightarrow \quad N = \# \text{ of voltage}$$

Example:

Find V_{R3} ? using KVL

$$-30 + 18 - 5 + 12 - 15 + V_{R3} = 0$$

$$V_{R3} = 20 \text{ V}$$



Example :

Find the KVL equation for the two paths abda and bcdb

Path abda:

$$V_{R1} + V_{R2} - V_s = 0$$

Path bcdb:

$$20 V_{R1} + V_{R3} - V_{R2} = 0$$

