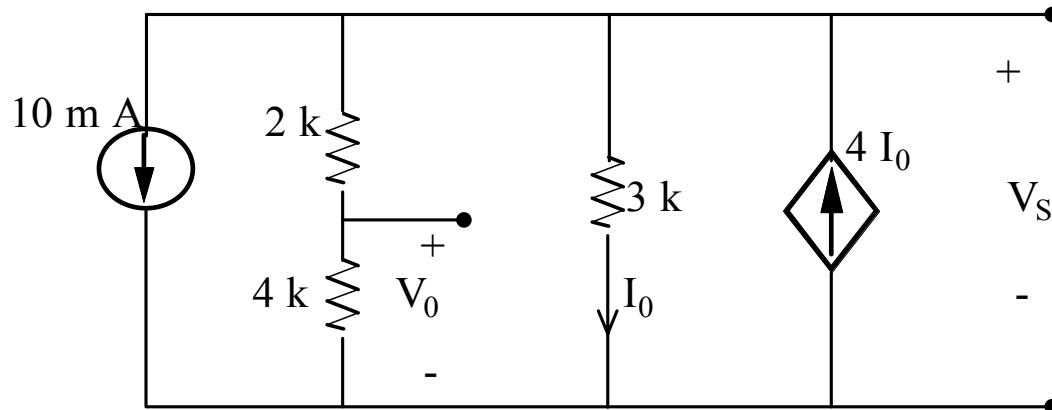


Example:

Find V_0 using KCL:



$$10 \text{ m} + \frac{V_s}{6 \text{ k}} + \frac{V_s}{3 \text{ k}} - 4 \left(\frac{V_s}{3 \text{ k}} \right) = 0$$

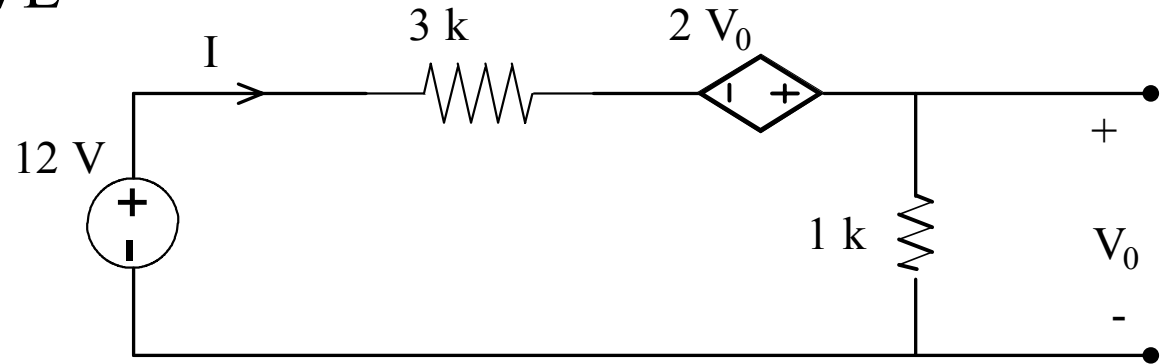
$$V_s \left[\frac{1}{6 \text{ k}} + \frac{1}{3 \text{ k}} - \frac{4}{3 \text{ k}} \right] = -10 \text{ m A}$$

$$V_s = 12 \text{ V}$$

$$V_0 = \frac{4 \text{ k}}{2 \text{ k} + 4 \text{ k}} V_s = \frac{2}{3} (12) = 8 \text{ V}$$

Example:

Find V_0 using KVL



$$-12 + (3\text{ k})I - 2V_0 + V_0 = 0$$

$$-V_0 + (3\text{ k})I - 12 = 0$$

$$I = \frac{V_0}{1\text{ k}}$$

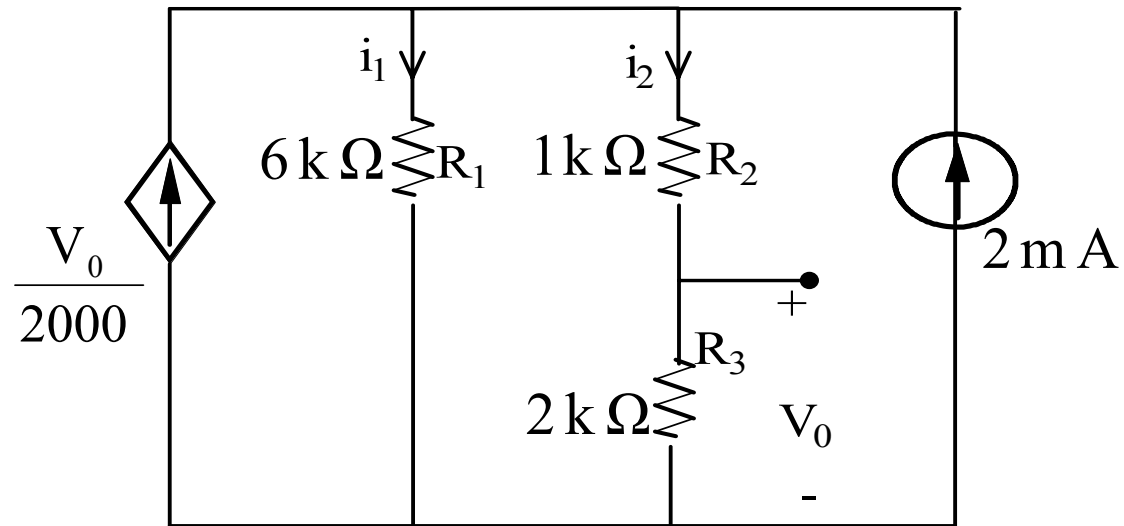
$$-V_0 + (3\text{ k})\left(\frac{V_0}{1\text{ k}}\right) = 12$$

$$-V_0 + 3V_0 = 12$$

$$V_0 = 6\text{ V}$$

Example:

Find V_0 in the network



$$\frac{V_0}{2000} - i_1 - i_2 + 2\text{ mA} = 0$$

$$R_1 i_1 = (R_2 + R_3) i_2$$

$$\text{Also } (6\text{ k}\Omega) i_1 = (3\text{ k}\Omega) i_2$$

$$\therefore i_1 = \frac{1}{2} i_2$$

$$\therefore \frac{V_0}{2000} - \frac{1}{2}i_2 - i_2 + 2 \text{ mA} = 0$$

$$\frac{V_0}{2000} - \frac{3}{2}i_2 + 2 \text{ mA} = 0$$

$$\therefore V_0 = R_3 i_2 \quad \Rightarrow \quad i_2 = \frac{V_0}{2 \text{ k}}$$

$$\therefore \frac{V_0}{2 \text{ k}} - \frac{3}{2} \left(\frac{V_0}{2 \text{ k}} \right) + 2 \text{ mA} = 0$$

$$\frac{1}{2} \left(\frac{V_0}{2 \text{ k}} \right) = 2 \text{ mA} \quad \Rightarrow \quad V_0 = 8 \text{ V}$$