

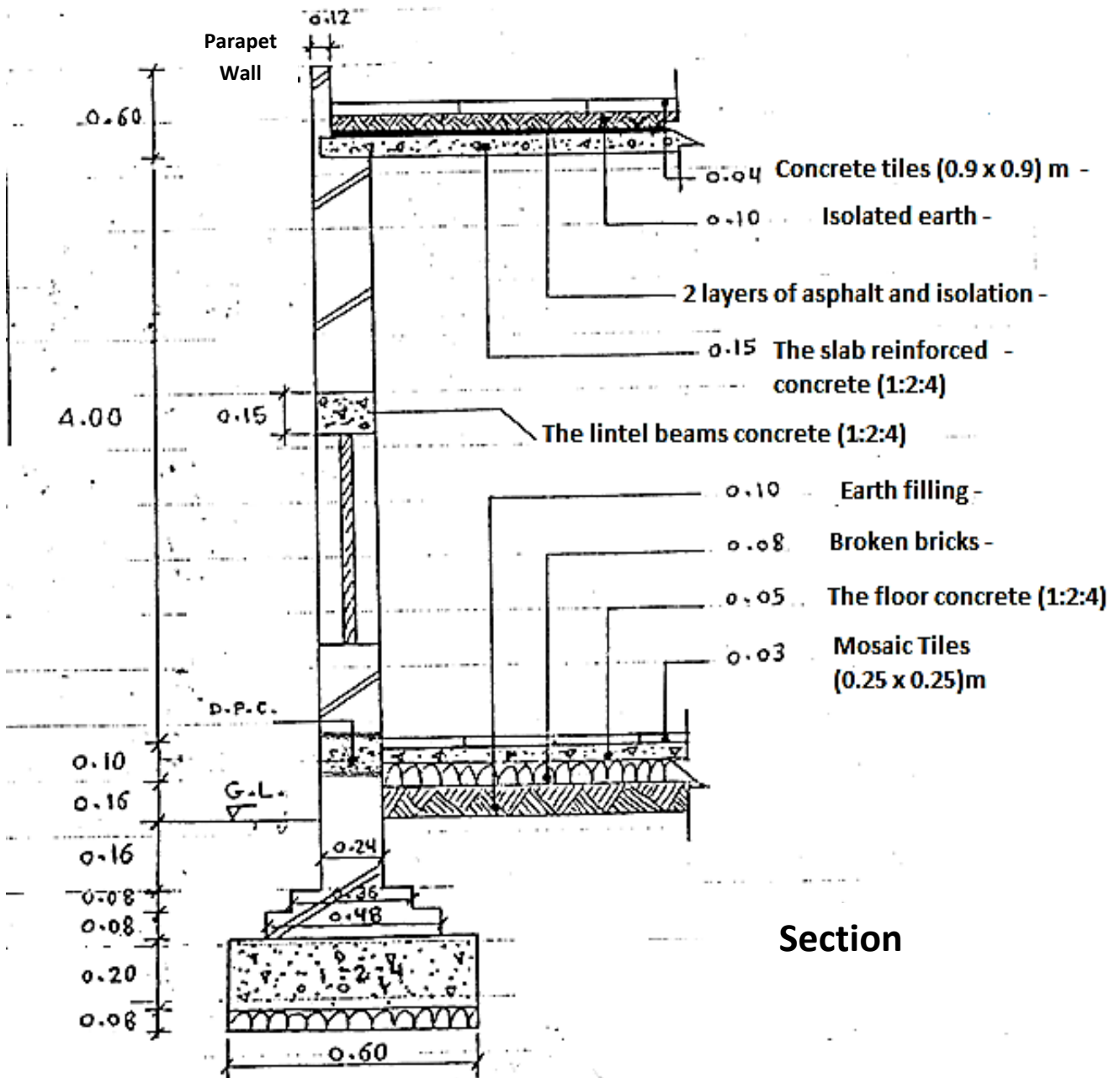
Dr. Hassan Issa  
 Dr. Aliaa Hamadi  
 Lect. Mustafa Ayad

### Examples of Bill of Quantities

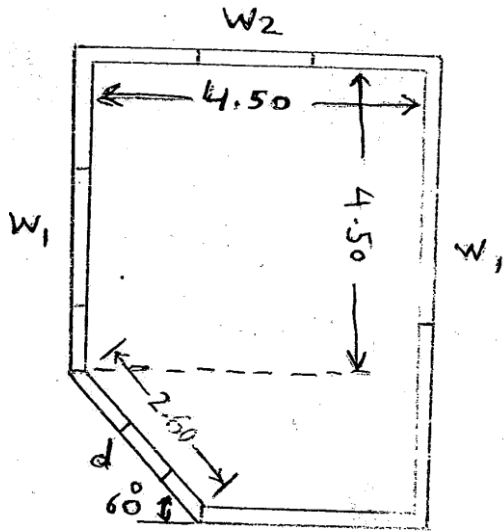
أمثلة عن إعداد جداول الكميات

Ex/ for the plan and section of the wall shown below. Calculate quantities for each of the following construction works:

- 1- Excavation works for foundation.
- 2- All concrete works from foundation to the roof, take in the consideration that there is a continuous tie beam.
- 3- Brick works with bricks and cement mortar (from foundation to the ceiling up to the parapet wall).



Dr. Hassan Issa  
 Dr. Aliaa Hamadi  
 Lect. Mustafa Ayad

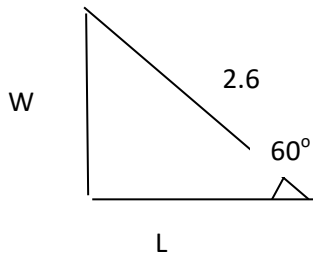


**Plan**

	Width (m)	Height (m)
D	1	2
W1	2	1.5
W2	1.5	1.5

**Solution:**

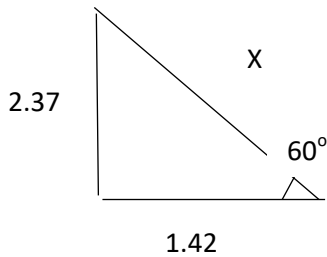
The interior triangle



$$W = 2.6 \times \sin 60 = 2.25 \text{ m}$$

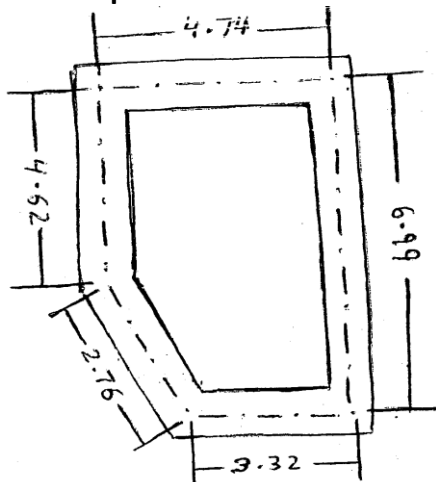
$$L = 2.6 \times \cos 60 = 1.3 \text{ m}$$

For the centre line:



$$X = \sqrt{(2.37)^2 + (1.42)^2} = 2.76 \text{ m}$$

The foundation plan for center line as below



$$\text{Length of centre line} = 3.32 + 5.99 + 4.74 + 4.62 + 2.76 = 22.43 \text{ m}$$

Dr. Hassan Issa  
Dr. Aliaa Hamadi  
Lect. Mustafa Ayad

No.	Activity/Item	Unit	Dimensions			Quantity	Notes & Calculations
			Length	Width	Height		
1	<b><u>Earth works:</u></b> Excavation works	m <sup>3</sup>	22.43	0.6	0.6	8.08	Length of center line = 3.32 + 5.99 + 4.74 + 4.62 + 2.76 = 22.43 m
2	<b><u>Concrete works:</u></b> Pouring concrete for foundation base (1:2:4)	m <sup>3</sup>	22.43	0.6	0.2	2.69	
3	Pouring reinforced concrete for a continuous tie beam (1:2:4)	m <sup>3</sup>	22.43	0.24	0.15	0.81	
4	Pouring reinforced concrete for the floor (1:2:4)	m <sup>3</sup>	28.91		0.05	1.45	$A = 6.75 \times 4.5 - [(2.25 \times 1.3)/2] = 28.91$
5	D.P.C with 0.1 depth	L.m	22.43			22.43	
6	Pouring reinforced concrete for the slab (1:2:4)	m <sup>3</sup>	34.09		0.15	5.11	$A = 7.23 \times 4.98 - [(2.49 \times 1.54)/2] = 34.09$
7	Brick works: Blinding layer for footing with 0.08 m thickness	m <sup>2</sup>	22.43	0.6		13.46	
8	Blinding layer for the ground base with 0.08 m thickness	m <sup>2</sup>	28.91			28.91	
9	Building with bricks and cement mortar (1:3) under the D.P.C - the 0.48 m step - the 0.36 m step - the 0.24 m step up to the D.P.C level	m <sup>3</sup> m <sup>3</sup> m <sup>3</sup>	22.43 22.43 22.43	0.48 0.36 0.24	0.08 0.08 0.32	0.86 0.65 1.72 3.32	
10	Building with bricks and cement mortar (1:3) above the D.P.C Level • Wall 0.24 m width above the D.P.C Level Excluding the following: - Volume of the door opening - Volume of the window opening W1 -Volume of the window	m <sup>3</sup> m <sup>3</sup> m <sup>3</sup>	22.43 2 1.5 1.5	0.24 1 2 1.5	4 0.24 0.24 0.24	21.53 -0.48 -1.44 -0.54	No. of doors = 1 No. of windows w1 = 2 No. of windows w2 = 1

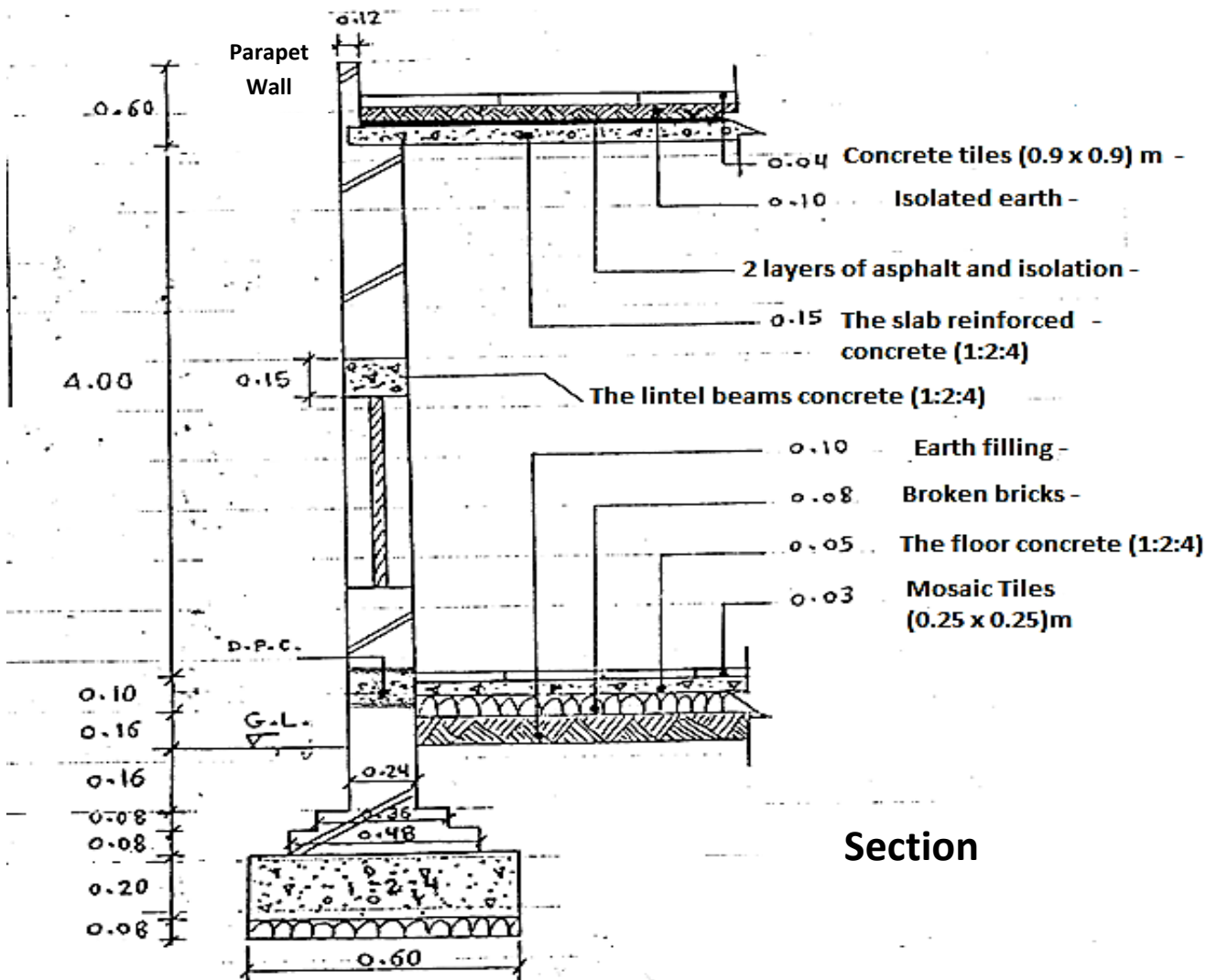
Dr. Hassan Issa  
 Dr. Aliaa Hamadi  
 Lect. Mustafa Ayad

	opening W2 - Volume of continuous tie beam (Item No. 3)					-0.81	
11	Building with bricks and cement mortar (1:3) for the parapet wall	m3	22.43	0.12	0.45	1.21	

**H.W**

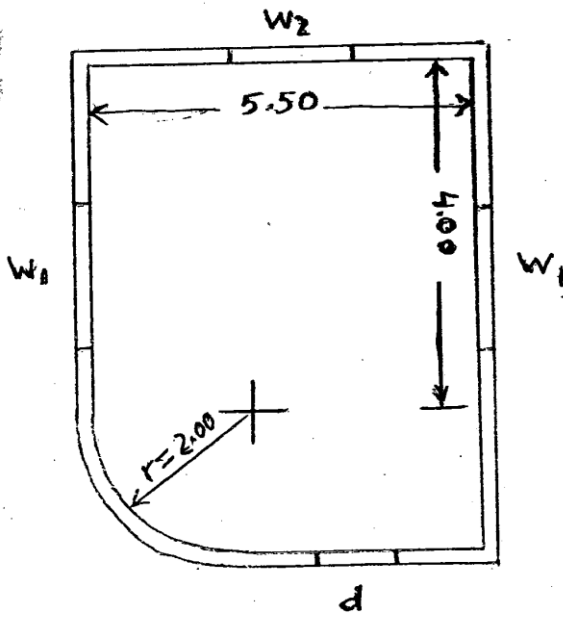
1/ For the plan and section of the wall shown below. Calculate quantities for each of the following construction works:

- 1- Excavation works for foundation.
- 2- All concrete works from foundation to the roof, take in consideration that there is a continuous tie beam.
- 3- Brick works (under & above the D.P.C level up to the parapet wall).



Dr. Hassan Issa  
 Dr. Aliaa Hamadi  
 Lect. Mustafa Ayad

**Plan**

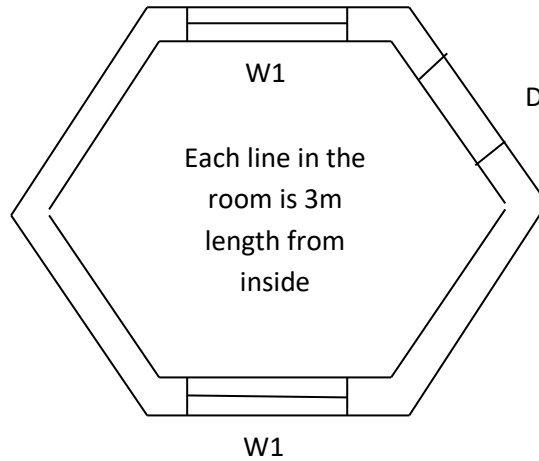


	Width (m)	Height (m)
D	1	2
W1	2	1.5
W2	1.5	1.5

2/ For the plan (hexagon shape) and section of the wall shown in No. 1. Calculate quantities for each of the following construction works:

- 1- Excavation works for foundation.
- 2- Brick works (under & above the D.P.C level up to the parapet wall).

**Plan**



	Width (m)	Height (m)
D	1	2
W1	2	1.5