

Q) A Green light has wavelength of 525 nm.
Determine the energy for the green light
in Joules.

The solution

to find frequency, we know that $c = \lambda \times \nu$

$$\nu = \frac{c}{\lambda} = \frac{3 \times 10^8 \text{ m/s}}{525 \times 10^{-9} \text{ m}} = 5.71 \times 10^{14} / \text{s}$$

to find energy \rightarrow we know that

$$E = h \times \nu$$
$$= (6.626 \times 10^{-34} \text{ J}\cdot\text{s}) \times (5.71 \times 10^{14} / \text{s})$$
$$= 3.78 \times 10^{-19} \text{ J/photon}$$

Q₂) Power output by a radiating body as a function of Temperature is given by the function below

$$P = A\sigma e T^4 \quad \sigma = 5.67 \times 10^{-8} \frac{\text{Watt}}{\text{m}^2 \cdot \text{K}^4}, \quad 0 \leq e \leq 1$$

P for the sun is equal to 3.85×10^{26} Watt

$$r_{\text{sun}} = 6.9 \times 10^8 \text{ m}, \quad A_{\text{surface}} = 4\pi r^2$$

Find the following:

1. Calculate the sun's Temperature assuming it can be modeled as a perfect blackbody.
2. Calculate its wavelength of maximum emission using Wien's displacement law.

The answer ~~is~~ From equation $P = A\sigma e T^4$

$$T = \sqrt[4]{\frac{P_{\text{sun}}}{4\pi r^2 \sigma e}} = \sqrt[4]{\frac{(3.85 \times 10^{26} \text{ W})}{4\pi (6.96 \times 10^8 \text{ m})^2 (5.67 \times 10^{-8} \frac{\text{W}}{\text{m}^2 \cdot \text{K}^4}) (1)}}$$

$$T \approx 5779 \text{ K}$$

$$\lambda_{\text{max}} T = 0.2898 \times 10^{-2} \text{ m} \cdot \text{K}$$

$$\lambda_{\text{max}} = \frac{0.2898 \times 10^{-2} \text{ m} \cdot \text{K}}{5779 \text{ K}}$$

$$\left[\begin{aligned} \lambda_{\text{max}} &= 5.01 \times 10^{-7} \text{ m} \\ &= 501 \text{ nm} \end{aligned} \right]$$

Q) Calculate frequency for high energy density at a 10000K for E_v and curve. Write spectrum name:

The Solution

$$\lambda_{max} \cdot T = b$$

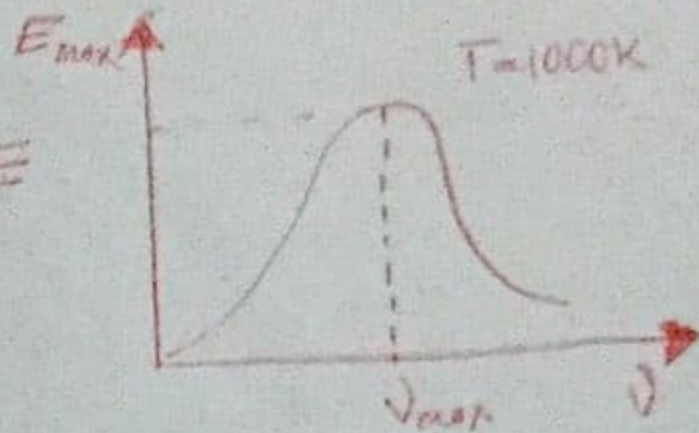
$$b = 2.89 \times 10^{-3}$$

$$T = 10000K$$

$$c = 3 \times 10^8 \frac{m}{s}$$

$$c = \nu_m \lambda_m$$

$$\lambda_m = \frac{c}{\nu_m}$$



$$\therefore \frac{c}{\nu_m} \cdot T = b$$

$$\nu_m = \frac{Tc}{b} = \frac{10000K \cdot 3 \times 10^8}{2.899 \times 10^{-3}} = \frac{3 \times 10^{14}}{2.899} = \frac{3}{2.899} \times 10^{14} \text{ Hertz}$$

high Infrared

* P3) maximum Radiation of 2um wavelength is emitted at a 1600K, if Temperature is 2000K what is the wavelength of spectrum is given.

The answer

$$\lambda_{m1} = 2\mu m$$

$$T_1 = 1600K$$

$$T_2 = 2000K$$

$$\lambda_{m2} = ?$$

$$\lambda_{m1} T_1 = b$$

$$\lambda_{m2} T_2 = b$$

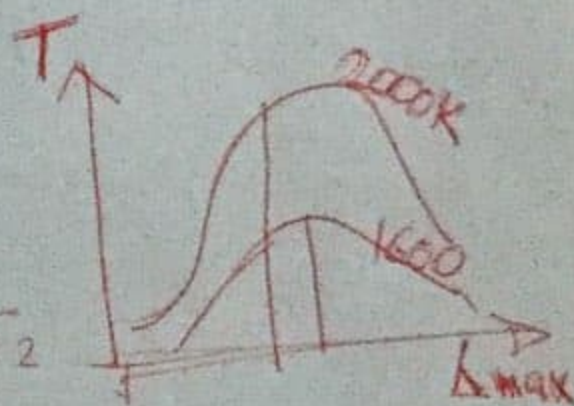
$$\lambda_{m1} T_1 = \lambda_{m2} T_2$$

$$2 \times 10^{-6} \times 1600 = \lambda_{m2} \cdot 2000$$

$$\therefore \lambda_{m2} = \frac{2 \times 10^{-6} \times 1600}{2000}$$

$$\lambda_{m2} = 1.6 \times 10^{-6} \mu m$$

$$\lambda_{m2} = 1.6 \mu m$$



Q4)

1. The wavelength of Radiation emitted by a body depends upon -
- a. the nature of its surface
 - b. The area of its surface
 - c. The Temperature of its surface
 - d. all the above factors

$$\lambda_m T = \text{constant}$$

$$\lambda_m \propto \frac{1}{T}$$


$$\lambda_{\text{max}} \propto \frac{1}{T}$$

2. if wavelengths of maximum intensity of Radiations emitted by the sun and moon are $0.5 \times 10^{-6} \text{ m}$ and 10^{-4} m respectively, the Ratio of their Temperatures is:

- a. 1/100
- b. 1/200
- c. 100
- d. 200



T_1, λ_1



T_2, λ_2

$$\lambda_{\text{max}} T = \text{const}$$

$$\lambda_1 T_1 = \lambda_2 T_2 \Rightarrow \frac{T_1}{T_2} = \frac{\lambda_2}{\lambda_1}$$

$$\therefore \frac{T_1}{T_2} = \frac{10^{-4}}{0.5 \times 10^{-6}} = \frac{1}{0.5 \times 10^{-2}} = 2 \times 10^2 = 200$$

3. if black wire of platinum is heated, then its colour first appear red then yellow and finally white. It can be understood on the basis of _____

- a. Wien's displacement law
- b. Prevost Theory of heat exchange
- c. Newton's law of cooling
- d. None of the above

Q4)

1. The wavelength of Radiation emitted by a body depends upon -
- a. the nature of its surface
 - b. The area of its surface
 - c. The Temperature of its surface
 - d. all the above factors

$$\lambda_m T = \text{constant}$$

$$\lambda_m \propto \frac{1}{T}$$


$$\lambda_{\text{max}} \propto \frac{1}{T}$$

2. if wavelengths of maximum intensity of Radiations emitted by the sun and moon are $0.5 \times 10^{-6} \text{ m}$ and 10^{-4} m respectively, the Ratio of their Temperatures is:

- a. 1/100
- b. 1/200
- c. 100
- d. 200**



T_1, λ_1



T_2, λ_2

$$\lambda_{\text{max}} T = \text{const}$$

$$\lambda_1 T_1 = \lambda_2 T_2 \Rightarrow \frac{T_1}{T_2} = \frac{\lambda_2}{\lambda_1}$$

$$\therefore \frac{T_1}{T_2} = \frac{10^{-4}}{0.5 \times 10^{-6}} = \frac{1}{0.5 \times 10^{-2}} = 2 \times 10^2 = 200$$

3. if black wire of platinum is heated, then its colour first appear red then yellow and finally white. It can be understood on the basis of _____

- a. Wien's displacement law**
- b. Prevost Theory of heat exchange
- c. Newton's law of cooling
- d. None of the above

4. The wavelength of maximum emitted energy of a body at 700K is $4.08 \mu\text{m}$. if the Temperature of the body is raised to 1400K the wavelength of maximum emitted energy will be

- a. $1.02 \mu\text{m}$
- b. $16.32 \mu\text{m}$
- c. $8.16 \mu\text{m}$
- d. $2.04 \mu\text{m}$**

$$\begin{array}{l}
 T_1 = 700\text{K} \qquad T_2 = 1400\text{K} \\
 \lambda_{m1} = 4.08 \mu\text{m} \qquad \lambda_{m2} = ? \\
 \lambda_{m1} T_1 = \lambda_{m2} T_2 \Rightarrow \lambda_{m2} = \frac{\lambda_{m1} T_1}{T_2} \\
 = \frac{4.08 * 700}{1400} = 2.04 \mu\text{m}
 \end{array}$$

5. A black body at 200K is found to emit maximum energy at a wavelength of $14 \mu\text{m}$. when its Temperature is raised to 1000K, the wavelength at which maximum energy is emitted is

- a. $14 \mu\text{m}$
- b. $70 \mu\text{m}$
- c. $2.8 \mu\text{m}$**
- d. 2.8mm

6. if a Black body is heated at a high Temperature, it seem to be _____

- a. Blue
- b. White**
- c. Red
- d. Black

7. The rate of Radiation of a black Body at 0°C is $E \text{ J/sec}$. The rate of radiation of This black body at 273°C will be

- a. $16E$**
- b. $8E$
- c. $4E$
- d. E

$$\begin{array}{l}
 E = \sigma T^4 \Rightarrow E \propto T^4 \\
 \left. \begin{array}{l} T_1 = 0^\circ\text{C} = 273\text{K} \\ T_2 = 273^\circ\text{C} = 546\text{K} \end{array} \right\} \frac{E_1}{E_2} = \left[\frac{T_1}{T_2} \right]^4 \\
 \frac{E_1}{E_2} = \frac{1}{16} \Rightarrow \boxed{E_2 = 16E_1} \quad \left. \begin{array}{l} \frac{E_1}{E_2} = \left[\frac{273}{546} \right]^4 = \left[\frac{1}{2} \right]^4 \\ = \frac{1}{16} \end{array} \right\}
 \end{array}$$